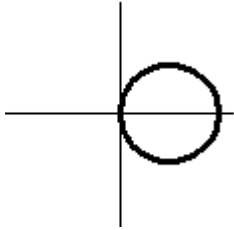


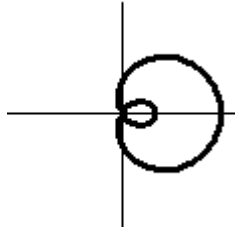
# HOW TO GRAPH POLAR FUNCTIONS OF THE FORM $r = a \pm b \cos \theta$ OR $r = a \pm b \sin \theta$

1. Determine the shape of the graph by finding  $\left| \frac{a}{b} \right|$ .

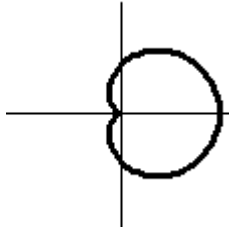
$\left| \frac{a}{b} \right| = 0$   
circle



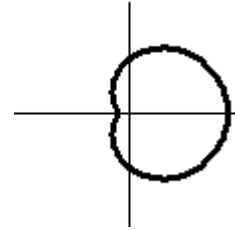
$\left| \frac{a}{b} \right| < 1$   
limaçon with loop



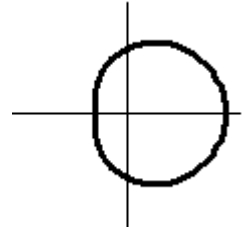
$\left| \frac{a}{b} \right| = 1$   
cardioid



$1 < \left| \frac{a}{b} \right| < 2$   
limaçon with dimple

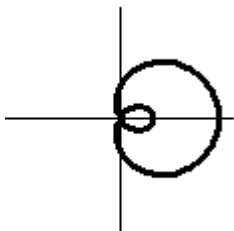


$\left| \frac{a}{b} \right| \geq 2$   
convex limaçon

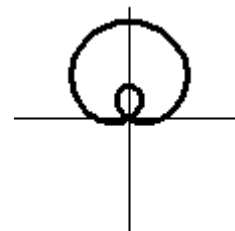


2. Determine the axis of symmetry by the trigonometric function used.

$r = a \pm b \cos \theta$   
symmetric over polar axis ( $x$ -axis)

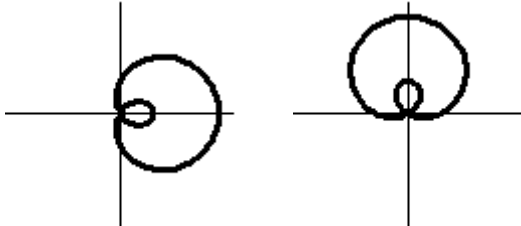


$r = a \pm b \sin \theta$   
symmetric over  $\theta = \frac{\pi}{2}$  ( $y$ -axis)

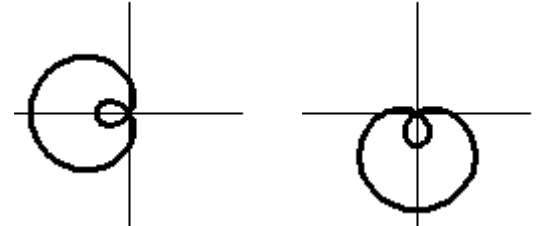


3. Determine the “direction” of the graph by the sign of  $b$ .

$b > 0$   
“bigger” end on the right/top  
“puckered” end on the left/bottom



$b < 0$   
“bigger” end on the left/bottom  
“puckered” end on the right/top



4. Determine the  $x$ - and  $y$ -intercepts by finding the points corresponding to  $\theta = 0, \frac{\pi}{2}, \pi, \frac{3\pi}{2}$

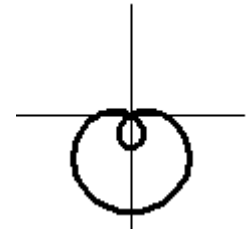
$\theta = 0, \pi$  correspond to positive and negative  $x$ -intercepts (assuming  $r > 0$ )

$\theta = \frac{\pi}{2}, \frac{3\pi}{2}$  correspond to positive and negative  $y$ -intercepts (assuming  $r > 0$ )

If  $r < 0$ , the intercept is on the “other side” (negative vs positive, and vice versa) of the corresponding axis

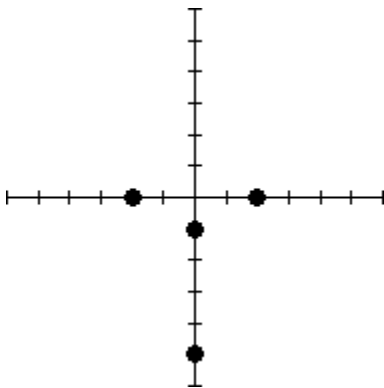
Example: Graph  $r = 2 - 3 \sin \theta$

1.  $\left| \frac{2}{-3} \right| < 1$                       limaçon with loop
2. equation uses  $\sin \theta$     symmetric over  $\theta = \frac{\pi}{2}$  ( $y$ -axis)
3.  $-3 < 0$                               “bigger” end on the bottom, “puckered” end on the top
- 4.



$\theta$	$r = 2 - 3 \sin \theta$
0	2 (positive $x$ - intercept)
$\frac{\pi}{2}$	-1 (negative $y$ - intercept)
$\pi$	2 (negative $x$ - intercept)
$\frac{3\pi}{2}$	5 (negative $y$ - intercept)

Intercepts only



Complete graph

